











EYFS

Helpful Resources!

0/1 Recognise numerals 1 to 5











	1	
	2	
	3	
	4	
	5	

0/2 Counting objects

Say and touch the number as you count



0/3 Counting up to 10

	6	
	7	
	8	
	9	
	10	

0/4 Count from a large group











Say the number as you count each object

To select 6 from this group of children




0/5 Select the numeral

Check!!


3		9	
1		7	
2		6	
5		10	
4		8	

0/8 More and fewer

1 2 3 4 5 6





1 2 3



More boys




Fewer girls

0/9 Total number in two groups

 +
  = 8


↑ ↑ ↑
 Dice 1 Dice 2 altogether

0/10 & 11 One more and one less

4	5	6
		
↑	↑	↑
4 is 1 less than 5	5	6 is 1 more than 5

0/6 Count a number of objects

Say and count to find how many balls here



0/7 Estimate and check by counting

I estimate there are 6 apples here.

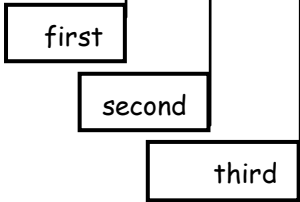
Check by counting!



0/12 Positional language

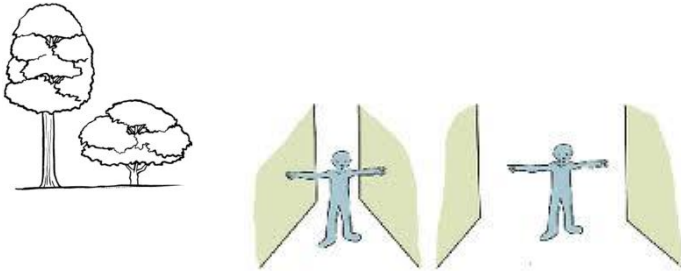


1 2 3 4 5 6 7



0/13 Shapes of everyday objects


- Tall and short / narrow and wide



- Round shapes



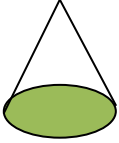

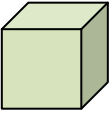



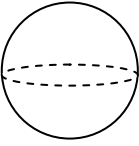

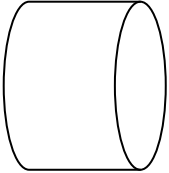

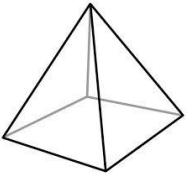

- Triangle shapes




0/14 Names of 2D shapes (flat shapes)

Name of shape	Example in everyday life
<p><u>Triangle</u></p>	
<p><u>Circle</u></p>	
<p><u>Square</u></p>	
<p><u>Rectangle</u></p>	

0/14 Names of 3D shapes (solid shapes)

Name of shape	Example in everyday life
<u>Cone</u> 	
<u>Cube</u> 	
<u>Cuboid</u> 	
<u>Sphere</u> 	
<u>Cylinder</u> 	
<u>Pyramid</u> 	

0/15 Relative position

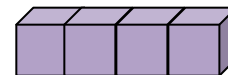
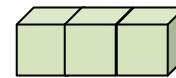


The rabbit is **between** the cat and dog.
 The horse is **left** of the guinea pig.
 The fish is **below** the dog.
 The cat is **above** the horse.
 The rabbit is to the **right** of the cat.

0/16 Order length

- Find the shortest - put it at the beginning
- Find the longest - put it at the end

Shortest



Longest



0/17 Order weight

- Find the lightest - put it at the beginning
- Find the heaviest - put it at the end

Lightest



Heaviest



0/17 Order capacity (continued)

- Find the smallest capacity - put it at the beginning
- Find the largest capacity - put it at the end

Smallest capacity




Largest capacity



- The days of the week

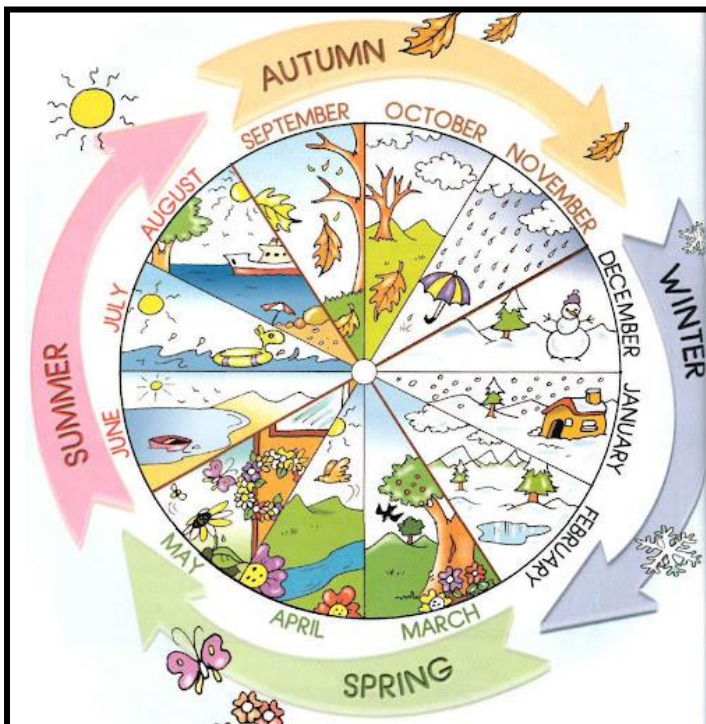


- Parts of a day



0/18 Everyday language related to time

- The months and seasons



0/19 Everday language related to money

Our coins

1p



2p



5p



10p



20p



50p




£1



£2

0/20 Sequence familiar events



- A - Get out of bed
- C - Clean teeth
- D - Go to school
- B - Go to bed